

**BHARATIYA VIDYA BHAVAN'S MEHTA VIDYALAYA**

**DATE :**

**CLASS : I**

**DAY :**

**ENGLISH WORKSHEET**

**A WRITE ANY ONE NAMING WORD**

**1 PEOPLE** \_\_\_\_\_



**2 PLACE** \_\_\_\_\_




**3 THING** \_\_\_\_\_

**4 ANIMAL** \_\_\_\_\_

**B MATCH THE OPPOSITE WORDS**

**1 TALL**

**a SMALL**




**2 BIG**

**b FAR**



**3 NEAR**

**c SHORT**



**4 OPEN**

**d SAD**




**5 HAPPY**

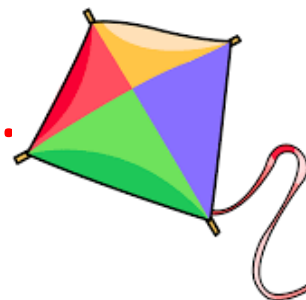
**e CLOSE**



**FILL IN THE BLANKS USING a or an**



**1 I am playing with \_\_\_\_\_ ball.**




**2 This is \_\_\_\_\_ elephant.**

**3 He has \_\_\_\_\_ orange.**

**4 My brother has \_\_\_\_\_ big kite.**



**5 Mona likes to eat \_\_\_\_\_ apple**




# BHARATIYA VIDYA BHAVAN'S MEHTA VIDYALAYA

DATE :

CLASS : I

DAY :

## ENGLISH WORKSHEET



### A Write the opposite word


1



\_\_\_\_\_ - SMALL



2




Hard - \_\_\_\_\_



3



\_\_\_\_\_ - NIGHT



4




Open - \_\_\_\_\_



5



\_\_\_\_\_ - WHITE




6



Thin - \_\_\_\_\_



7



\_\_\_\_\_ - FAST



8



Happy - \_\_\_\_\_



# BHARATIYA VIDYA BHAVAN's MEHTA VIDYALAYA

CLASS : I



ENGLISH

TOPIC : OPPOSITE WORDS





## Read the story

Johnny went to the Zoo. He saw different animals. He saw

a **big**  elephant and a **small**  elephant

calf. They had **fat** legs but **thin** tail whereas Giraffe had a

**long**  neck and **short** tail. Rabbit  was running very

**fast** but tortoise was **slow**.  Tortoise had a **hard**

shell but rabbit had **soft** fur. He saw a **black**  and **white**

duck. A monkey was jumping **up**  and **down** making

**happy** and **sad** faces.  A lion was moving **in** and **out** of

the den. A crocodile was sitting **near**  the water while

others were very **far**. All the animals move in their cage

during **day** and sleep  at **night**. They also want to

move in **open** and not live in  **close** cages. 



BHARATIYA VIDYA BHAVAN'S MEHTA VIDYALAYA

SUBJECT : ENGLISH CLASS: I

TOPIC : OPPOSITE WORDS



1 The tea  is \_\_\_\_\_ but the juice



is \_\_\_\_\_

2 The boy is going \_\_\_\_\_



and coming \_\_\_\_\_



3 The rabbit  runs \_\_\_\_\_ and the



tortoise is \_\_\_\_\_.

4 We all like  \_\_\_\_\_ and not



\_\_\_\_\_ face.


5. He is a \_\_\_\_\_ boy but his brother is



very \_\_\_\_\_.



6. This is a \_\_\_\_\_ duck and that is a



\_\_\_\_\_ duck.

7. The parrot is \_\_\_\_\_ the cage and the bird



is \_\_\_\_\_ of the \_\_\_\_\_ cage.



8. I have a \_\_\_\_\_ ball and a



\_\_\_\_\_ ball.



9. This bee is \_\_\_\_\_ the flowers



but that is very \_\_\_\_\_.






BHARATIYA VIDYA BHAVAN'S MEHTA VIDYALAYA

DATE:

CLASS: I

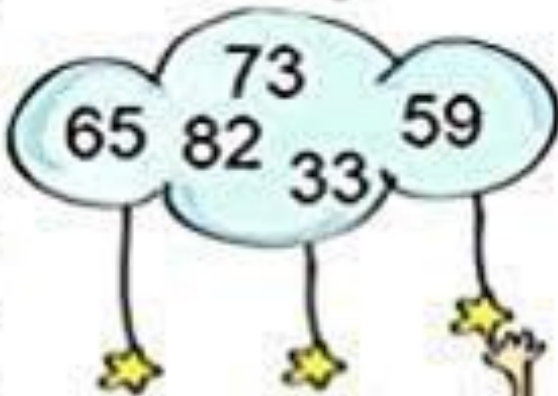
DAY :

MATHS WORKHEET




ARRANGE THE GIVEN NUMBERS IN THE GIVEN ORDER

SMALLER TO BIGGER



BIGGER TO SMALLER



Five empty boxes for writing numbers, with arrows pointing up towards the girl on the ladder.



Five empty boxes for writing numbers, with arrows pointing up towards the girl on the ladder.

# BHARATIYA VIDYA BHAVAN'S MEHTA VIDYALAYA

NAME :

CLASS : I

DATE:

## CIRCLE THE SMALLEST NUMBER

A	12	11	14	15	13
B	25	45	55	35	15
C	40	60	30	50	20
D	33	11	44	22	55
E	53	42	64	35	26

## SOLVE SUMS OF SIMPLE ADDITION

$$\begin{array}{r} 3 \\ + 2 \\ \hline \hline \end{array}$$

$$\begin{array}{r} 5 \\ + 4 \\ \hline \hline \end{array}$$

$$\begin{array}{r} 6 \\ + 2 \\ \hline \hline \end{array}$$

$$\begin{array}{r} 2 \\ + 0 \\ \hline \hline \end{array}$$





# BHARATIYA VIDYA BHAVAN'S MEHTA VIDYALAYA

NAME:

CLASS:I

DATE:



Happy Trails  
study Easy

## Missing numbers - 1 to 50



			16		30		44
				24		38	
1	6		18		32		
		12					47
	8			27			
4		14	21			42	
	10				36		



NAME :

CLASS :

DATE:



LOOK AT THE GIVEN PICTURE. EACH NUMBER STANDS FOR A COLOUR. USE THE CLUES AND COLOUR THE PICTURE NEATLY.



- |          |        |          |         |
|----------|--------|----------|---------|
| 1-yellow | 2-blue | 3-pink   | 4-green |
| 5-orange | 6-red  | 7-purple |         |

BHARATIYA VIDYA BHAVAN' MEHTA VIDYALAYA

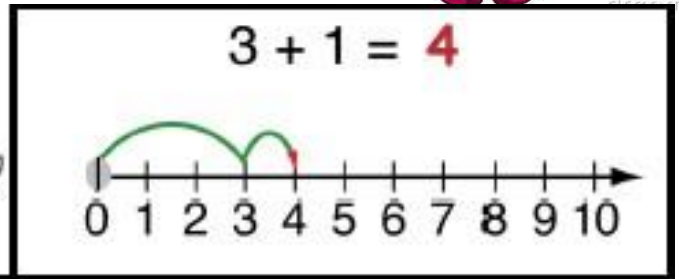
NAME:

CLASS:I

DATE:



Addition on a  
Number Line



$6 + 4 =$ _____
$2 + 7 =$ _____
$3 + 3 =$ _____
$2 + 4 =$ _____
$1 + 8 =$ _____
$3 + 3 =$ _____
$6 + 6 =$ _____
$8 + 3 =$ _____
$5 + 4 =$ _____




NAME: \_\_\_\_\_

CLASS: I

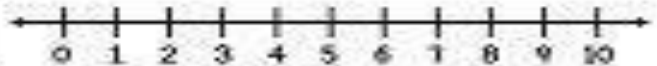
DATE: \_\_\_\_\_



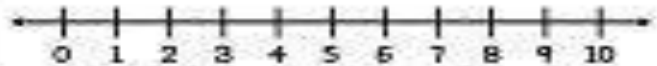
Name \_\_\_\_\_

# number lines

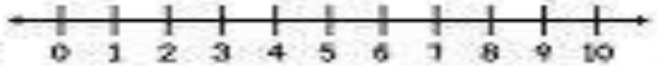
$3 + 4 = \square$



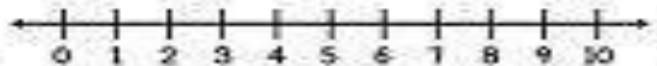
$5 + 2 = \square$



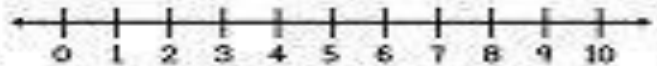
$4 + 2 = \square$



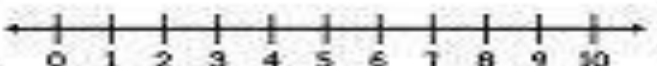
$6 + 1 = \square$



$3 + 3 = \square$



$4 + 5 = \square$



$3 + 5 = \square$



This was:  
(Circle one)

Easy

Just Right

Hard

$1 + 2 = 3$



$6 + 7 = ?$



$6 + 8 = ?$



NAME :

CLASS : I

DATE:



## खाली स्थान भरो

घर	।	(चल/हल)
यह	चख्र।	(घर/फल)
	तक चल।	(शहद/महल)
	मत कर।	(सड़क /बहस)
फसल	गई।	(कट/मटर)
घर	पढ़।	(चलकर /सरकस)
जय	पर चल।	(नल /पथ)
यश	पर चढ़।	( टब/ बस)
	आम पक गए।	(दस/ कट)
अब	चल।	(पल/ घर)
सब	कह।	(सच/कप)


BHARATIYA VIDYA BHAVAN'S MEHTA VIDYALAYA

NAME :


CLASS : I

DATE:

Colour the given picture .Count and write the number name in the box .



Count and write the number name in the given box



BHARATIYA VIDYA BHAVAN'S MEHTA VIDYALAYA

NAME :

CLASS : I

DATE:

Draw the dots in the dice to get the total number

7		9		4	
10		6		7	
8		3		9	
10		8		6	
7		9		10	
6		4		5	
8		7		8	
9		5		10	
3		8		6	
9		10		9	

# BHARATIYA VIDYA BHAVAN'S MEHTA VIDYALAYA


NAME:

CLASS: I

DATE

Do the addition and subtraction of numbers and find the sum of the numbers (+) or number left (-) ?

Colour the beautiful gown of the girl with the colour given for the numbers or number left .



A girl with blonde hair and a pink bow is wearing a gown. The gown is divided into sections, each containing a simple addition or subtraction problem. To the right of the girl is a large purple question mark. Further right is a color key with seven colored circles and numbers 1 through 7. At the bottom right, there is a small illustration of a paint palette and a pencil.

Color key:

- 1: Yellow
- 2: Red
- 3: Green
- 4: Orange
- 5: Cyan
- 6: Blue
- 7: Magenta

Math problems on the gown:

- 9-8, 7-6, 4-1, 7-1, 1+1, 6-3, 8-6, 8-4, 5+1, 9-7, 5-1, 8-2, 7-3, 9-4, 4+3, 9-3, 1+1, 2-1, 1+1, 1+1, 1+1, 8-6, 7-2, 2+2, 5-3, 2-1, 3-2, 7-5, 4-2, 3+2, 7-4, 7-4, 1+1, 8-7, 4-3, 1+1, 1+1, 7-6, 1+1, 3-2, 1+1, 8-7



**BHARATIYA VIDYA BHAVAN'S MEHTA VIDYALAYA**

**NAME:** \_\_\_\_\_

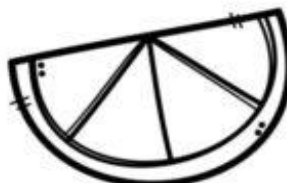
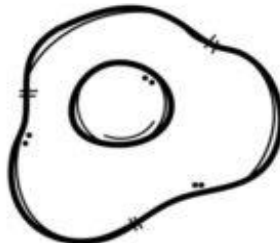




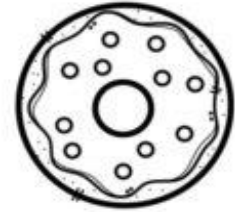
**CLASS: I**

**DATE:** \_\_\_\_\_

Name \_\_\_\_\_

# Healthy OR Not Healthy?

Cross out the unhealthy foods. Color the healthy foods.





# GENERAL AWARENESS

## Let's learn about "MY FAMILY"

LINK : <https://youtu.be/rZycC1e4v5Y>



**Hello everyone ! My name is Rahul.**  
**I live in Delhi with my family .They**  
**are my family members .**

Four empty green rectangular boxes arranged horizontally, intended for labeling the boy's family members.

One empty green rectangular box, intended for labeling a family member.



One empty green rectangular box, intended for labeling a family member.

One empty green rectangular box, intended for labeling a family member.

One empty green rectangular box, intended for labeling a family member.

One empty green rectangular box, intended for labeling a family member.

One empty green rectangular box, intended for labeling a family member.